

2.21

1. Which number sentence best tells about this picture?















- A** $6 + 2 = 3$
B $3 + 2 + 5 = 6$
C $3 + 2 = 5$
D $5 + 2 = 7$

2.21

2. Here is a number sentence.

$$7 - 4 = 3$$

Which picture best tells about this sentence?

- A**  is  take away 
- B**  is  take away 
- C**  take away  is 
- D**  plus  is 

2.21

15. Fill in the blank for this number sentence.

$$4 + \underline{\quad} = 9$$

- A** 3
- B** 4
- C** 5
- D** 6